



Measure each of the bars (in centimeters) and then generate a line plot based on the information.

Answers



1. \_\_\_\_\_



2. \_\_\_\_\_



3. \_\_\_\_\_




4. \_\_\_\_\_



5. \_\_\_\_\_



6. \_\_\_\_\_



7. \_\_\_\_\_



8. \_\_\_\_\_



9. \_\_\_\_\_



10. \_\_\_\_\_



11. \_\_\_\_\_



12. \_\_\_\_\_



13. \_\_\_\_\_

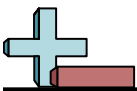


14. \_\_\_\_\_




15. \_\_\_\_\_

**Line Plot**



Measure each of the bars (in centimeters) and then generate a line plot based on the information.



Answers

1. 4

2. 2

3. 10

4. 2

5. 2

6. 4

7. 2

8. 7

9. 10

10. 7

11. 6

12. 10

13. 2

14. 10

15. 2

**Line Plot**

